

Side Sort

Name _____

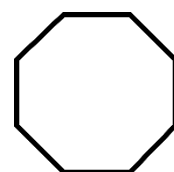
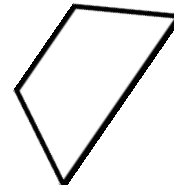


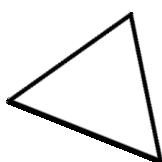
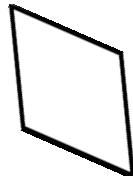
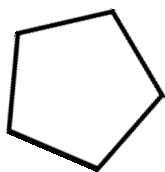
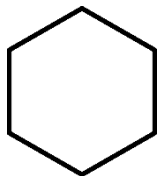
Date _____

Cut out the shapes below and glue them in the correct column.

More than 4

Less than 4

Exactly 4

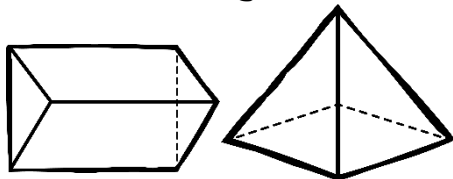


Faces, Edges, and Vertices

Name _____

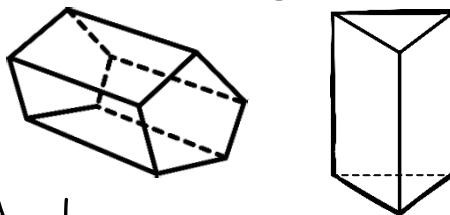
Date _____

1. What is the difference in the number of faces on these solid figures?



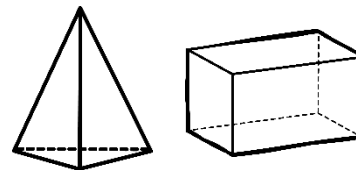
- A. 3
- B. 1
- C. 0
- D. 4

2. What is the difference in the number of vertices on these solid figures?



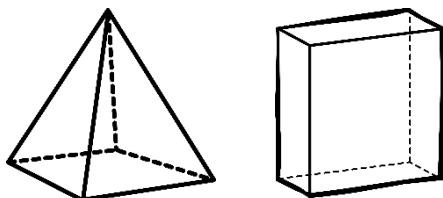
- A. 1
- B. 2
- C. 4
- D. 3

3. What is the difference in the number of edges on these solid figures?



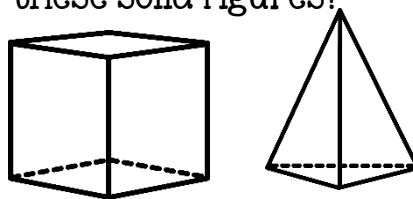
- A. 5
- B. 3
- C. 6
- D. 4

4. What is the difference in the number of vertices on these solid figures?



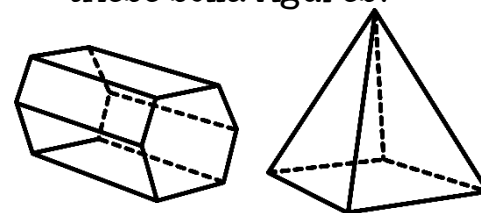
- A. 2
- B. 6
- C. 1
- D. 3

5. What is the difference in the number of faces on these solid figures?



- A. 5
- B. 4
- C. 2
- D. 8

6. What is the difference in the number of faces on these solid figures?



- A. 4
- B. 3
- C. 0
- D. 2